

## Lefel 1 Cymhwyso Sgiliau Rhif Hanfodol Prawf sampl cadarnhau 4

Hyd - ar y mwyaf: 30 munud

### **Nodyn pwysig**

Mae hwn yn brawf sampl cadarnhau, cyhoeddwyd ar y cyd gan y pedwar corff dyfarnu Sgiliau Hanfodol (Agored Cymru, City & Guilds, Pearson a CBAC).

Mae'r prawf sampl yn rhoi arwydd o fformat a strwythur y profion cadarnhaol byw.

Mae dogfen arall sydd yn cynnwys yr allwedd atebion (atebion cywir) a chyfeirnodau'r fanyleb hefyd ar gael.

**Mae'r prawf cadarnhau hwn- yn cynnwys 20 o gwestiynau amlddewis.**

# Level 1 Essential Application of Number Skills

## Sample confirmatory test 4

Maximum duration: 30 minutes

### **Important note**

This is a sample confirmatory test, developed jointly by the four Essential Skills Wales awarding bodies (Agored Cymru, City & Guilds, Pearson and WJEC).

This sample test provides an indication of the likely format and structure of the live confirmatory tests.

A separate document, containing the answer keys (correct answers) and specification references is also available.

**This confirmatory test consists of 20 multiple choice questions.**

**Mae Cwestiynau 1 i 5 yn sôn am bêl-droed.**

1 Mae clwb pêl-droed yn talu dau ddeg naw miliwn o bunnau am chwaraewr.

Beth ydi dau ddeg naw miliwn o bunnau mewn ffigurau?

- a £29 000
- b £2 900 000
- c £29 000 000
- d £290 000 000

---

**Questions 1 to 5 are about football.**

1 A football club pays twenty-nine million pounds for a player.

What is twenty-nine million pounds in figures?

- a £29000
- b £2900000
- c £29000000
- d £290000000

2 Mae tocyn tymor i oedolyn yn costio £418

Mae'r tocyn am 20 gêm.

Faint mae bob gêm yn costio?

- a £20.09
- b £20.40
- c £20.90
- d £29.00

---

2 The cost of an adult season ticket is £418

The season ticket is for 20 games.

What is the cost for each game?

- a £20.09
- b £20.40
- c £20.90
- d £29.00

3 Mae cefnogwr yn teithio mewn bws i 16 gêm.

Mae hi'n talu £18 am docyn bws i bob gêm.

Faint mae hi'n ei dalu i gyd gyda'i gilydd am y tocynnau bws?

- a £126
- b £266
- c £288
- d £328

---

3 A supporter travels by coach to 16 matches.

She pays the coach fare of £18 for each match.

How much does she pay in total for the coach fares?

- a £126
- b £266
- c £288
- d £328

4 Mae 52 o bobl yn teithio ar y bws ar un siwrnai.

Mae  $\frac{3}{4}$  o'r bobl sy'n teithio ar y bws yn oedolion.

Faint o oedolion sy'n teithio ar y bws?

- a 13
- b 29
- c 35
- d 39

---



4 On one journey, the coach has 52 passengers.

On the coach  $\frac{3}{4}$  of the passengers are adults.

How many passengers are adults?

- a 13
- b 29
- c 35
- d 39

5 Mae'r tabl yn dangos rhan o amserlen bysiau.

Gwasanaeth B39 o Dash Road i'r Orsaf				
Dash Road	1600	1620	1640	1655
Parc Busnes Harlech	1605	1625	1645	1700
Grove Road	1615	1635	1655	1710
Cae Pêl-droed	1625	1645	1705	1720
Yr orsaf 	1635	1655	1715	1730

Mae angen i gefnogwr gyrraedd y cae pêl-droed erbyn 5 pm i ddal y bws i gêm oddi cartref.



Mae'n byw yn Dash Road.

Faint o'r gloch mae'r bws hwyraf y mae'n gallu ei ddal i gyrraedd y cae pêl-droed erbyn 5pm?

- a 1600
- b 1620
- c 1640
- d 1645

---

5 The table shows part of a bus timetable.

B39 service from Dash Road to Station				
Dash Road	1600	1620	1640	1655
Harlech Business Park	1605	1625	1645	1700
Grove Road	1615	1635	1655	1710
Football Ground	1625	1645	1705	1720
Station 	1635	1655	1715	1730

A supporter needs to reach the football ground by 5 pm to catch the coach to an away match.

He lives on Dash Road.

What is the time of the latest bus he should get to reach the football ground by 5 pm?

- a 1600
- b 1620
- c 1640

**Mae Cwestiynau 6 i 9 yn sôn am fwyta'n iach, deiet a ffitrwydd.**

6 Mae meddygon yn ein cyngori i fwyta 32 gram o ffibr y dydd.

Mae snac yn cynnwys 60% o'r ffibr sydd ei angen arnom mewn diwrnod.

Beth ydi 60% o 32 gram?

- a 5.3 gram
- b 18.2 gram
- c 19.2 gram
- d 22.0 gram

---

**Question 6 to 9 are about healthy eating, diets and fitness.**

6 Doctors advise us to eat 32 grams of fibre a day.

A snack has 60% of the fibre that we need in a day.

What is 60% of 32 grams?

- a 5.3 grams
- b 18.2 grams
- c 19.2 grams
- d 22.0 grams



7 Mewn math arall o snac, y gymhareb braster i siwgr ydi 1 i 6

Mae 1.5 gram o fraster yn y snac.

Faint o siwgr sydd yn y snac?

- a 0.25 gram
- b 4.0 gram
- c 7.5 gram
- d 9.0 gram

---

7 In another snack the ratio of fat to sugar is 1 to 6

There are 1.5 grams of fat in the snack.

How much sugar is there in the snack?

- a 0.25 grams
- b 4.0 grams
- c 7.5 grams
- d 9.0 grams

- 8 Mae'r tabl yn dangos y pwysau sy'n cael ei argymhell ar gyfer dynion a merched.

Pwysau sy'n cael ei argymhell mewn cilogramau						
	Merched			Dynion		
Taldra mewn metrau	Ffrâm fach	Ffrâm ganolig	Ffrâm fawr	Ffrâm fach	Ffrâm ganolig	Ffrâm fawr
1.60	52	56	61	55.5	59	63.5
1.62	54	58	62.5	57	60.9	65
1.65	56	60	64.5	58.5	62	67
1.67	58	61.5	66.5	60	64	68
1.70	59.5	63.5	68	62	66	71
1.72	61	65	70	63.5	67.5	73

Mae dyn yn 1.70 metr o daldra.

Mae ganddo ffrâm ganolig.

Beth ydi'r pwysau sy'n cael ei argymhell ar gyfer y dyn?

- a 62 kg
- b 63.5 kg
- c 66 kg
- d 67.5 kg



9 Mae menyw yn pwyso 70.2 cilogram

Mae hi'n ymuno â champfa ac yn colli 1.6 cilogram o bwysau.

Beth yw ei phwysau newydd?

- a 68.4 kg
- b 68.6 kg
- c 69.4 kg
- d 69.6 kg

---

9 A woman weighs 70.2 kg.

She joins the gym and loses 1.6 kg in weight.

What is her new weight?

- a 68.4 kg
- b 68.6 kg
- c 69.4 kg
- d 69.6 kg

**Mae'r dudalen hon yn wag yn fwriadol**

**This page is intentionally blank**

**Mae Cwestiynau 10 i 13 yn sôn am wyau.**

10 Mae wyau'n cael eu gwerthu yn ôl eu maint: bach, canolig, mawr a mawr iawn.

Mae'r tabl yn dangos beth ydi pwysau wŷ ym mhob maint.

Maint	Pwysau
Bach	O dan 53 gram
Canolig	53-62 gram
Mawr	63-72 gram
Mawr iawn	73 gram a drosodd

Mae 6 wŷ mewn boc. Mae bob wŷ yr un maint.

Pwysau'r wyau i gyd gyda'i gilydd ydi 336 g.

Beth ydi maint y wyau hyn?

- a Bach
- b Canolig
- c Mawr
- d Mawr iawn

**Questions 10 to 13 are about eggs.**

10 Eggs are sold by size: small, medium, large and very large.

The table shows the weight of an egg at each size.

Size	Weight
Small	Under 53 grams
Medium	53-62 grams
Large	63-72 grams
Very large	73 grams and over

There are 6 eggs of the same size in a box.

The total weight of the eggs is 336 g.

What is the size of these eggs?

- a Small
- b Medium
- c Large
- d Very Large

11 Mae wyau'n cael eu gwerthu mewn bocsys o chwech.

Dyma bwysau'r wyau yn un boc.

46 gram	50 gram	47 gram	51 gram	52 gram	51 gram
---------	---------	---------	---------	---------	---------

Beth ydi pwysau cyfartalog (cymedr) y wyau?

- a 49.3 gram
- b 49.5 gram
- c 50.5 gram
- d 51.0 gram

---

11 Eggs are sold in boxes of six.

These are the weights of the eggs in one box.

46 grams	50 grams	47 grams	51 grams	52 grams	51 grams
----------	----------	----------	----------	----------	----------

What is the average (mean) weight of the eggs?

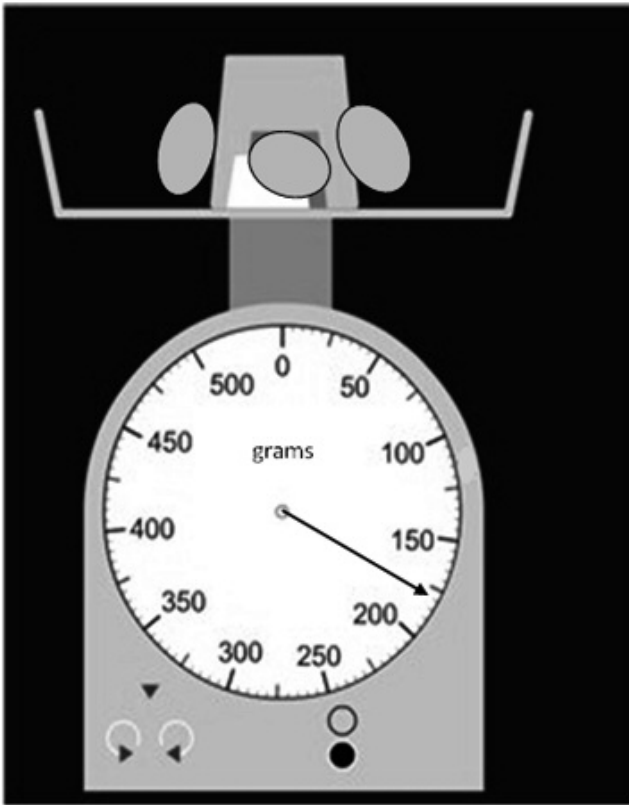
- a 49.3 grams
- b 49.5 grams
- c 50.5 grams
- d 51.0 grams



**Mae'r dudalen hon yn wag yn fwriadol**

**This page is intentionally blank**

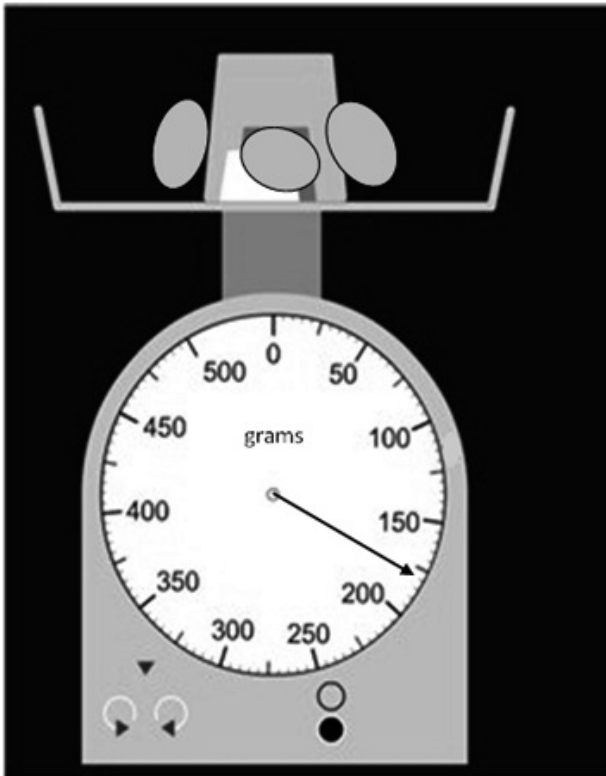
12 Mae cogydd eisiau gwybod beth ydi pwysau wyau.



Beth ydi'r pwysau y mae'r glorian yn ei ddangos?

- a 162 g
- b 175 g
- c 180 g
- d 192 g

12 A cook wants to know the weight of some eggs.



What is the weight shown on the scale?

- a 162 g
- b 175 g
- c 180 g
- d 192 g

13 Mae ŵy iâr yn pwyso  $\frac{2}{5}$  o ŵy gŵydd.

Beth ydi  $\frac{2}{5}$  fel canran?

- a 7%
- b 10%
- c 25%
- d 40%

---

13 The weight of a chicken's egg is  $\frac{2}{5}$  of the weight of a goose egg.

What is  $\frac{2}{5}$  written as a percentage?

- a 7%
- b 10%
- c 25%
- d 40%

**Mae Cwestiynau 14 i 16 yn sôn am gadwyn o fynyddoedd.**

14 Y llynedd roedd 409300 o bobl wedi ymweld â mynyddoedd Llangors.

Beth ydi 409300 mewn geiriau?

- a Pedwar deg mil naw cant tri deg
- b Pedwar deg naw mil tri chant
- c Pedwar cant a naw mil tri chant
- d Pedwar miliwn a naw mil tri chant

---

**Questions 14 to 16 are about a mountain range.**

14 Last year 409300 people visited the Llangors mountain range.

What is 409300 in words?

- a Forty thousand nine hundred and thirty
- b Forty nine thousand three hundred
- c Four hundred and nine thousand three hundred
- d Four million and nine thousand three hundred

- 15 Y llynedd, roedd  $\frac{3}{10}$  o'r bobl oedd wedi ymweld â'r mynyddoedd wedi dringo i'r top.

Beth ydi  $\frac{3}{10}$  mewn rhifau degol?

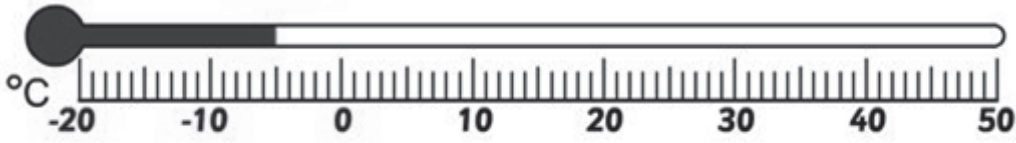
- a 0.03
- b 0.3
- c 0.33
- d 0.7

- 
- 15 Last year  $\frac{3}{10}$  of the people who visited the mountains climbed to the top.

What is  $\frac{3}{10}$  written as a decimal?

- a 0.03
- b 0.3
- c 0.33
- d 0.7

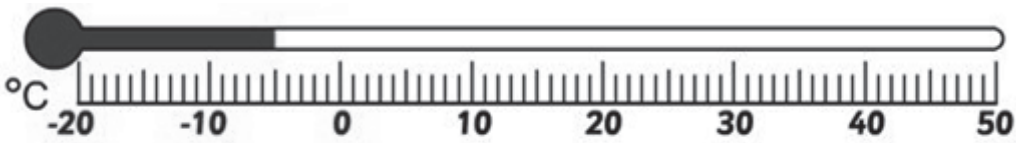
- 16 Mae'r thermomedr yn dangos beth ydi'r tymheredd ar dop y mynyddoedd ym mis Ionawr.



Pa dymheredd mae'r thermomedr yn ei ddangos?

- a 5°C
- b -5°C
- c -15°C
- d -20°C

- 
- 16 The thermometer shows the temperature at the top of the mountains in January.



What temperature does the thermometer show?

- a 5°C
- b -5°C
- c -15°C
- d -20°C

**Mae Cwestiynau 17 i 20 yn sôn am siop ddefnydd.**

17 Mae angen 1.4 metr o ddefnydd i wneud un bleind.

Faint o ddefnydd sydd ei angen i wneud 4 bleind?



- a 4.16 metr
- b 4.6 metr
- c 5.6 metr
- d 5.8 metr

---

**Questions 17 to 20 are about a material shop.**

17 It takes 1.4 metres of material to make one blind.

How much material in total is needed to make 4 blinds?



- a 4.16 metres
- b 4.6 metres
- c 5.6 metres
- d 5.8 metres



18 Mae cwsmer yn prynu dau ddarn o ddefnydd.

Mae un darn yn 160 centimetr o hyd ac mae'r llall yn 155 centimetr o hyd.

Beth ydi hyd y defnydd i gyd gyda'i gilydd mewn metrau?

- a 0.315 metr
- b 3.15 metr
- c 31.5 metr
- d 315 metr

---

18 A customer buys two pieces of material.

One piece is 160 centimetres long and the other is 155 centimetres long.

What is the total length of the material in metres?

- a 0.315 metres
- b 3.15 metres
- c 31.5 metres
- d 315 metres

19 Mae cwsmer yn prynu 9.5 metr o ddefnydd i wneud 5 o lenni.

Bydd pob llen yr un hyd.

Beth yw hyd y defnydd sydd gan y cwsmer ar gyfer pob llen?

- a 0.53 m
- b 1.1 m
- c 1.9 m
- d 4.0 m

---

19 A customer buys 9.5 m of material to make 5 curtains.

The curtains will be of equal length.

What length of material does the customer have for each curtain?

- a 0.53 m
- b 1.1 m
- c 1.9 m
- d 4.0 m

20 Mae'r siop yn agor stondin yn y farchnad ddau ddiwrnod yr wythnos.

Mae'r tabl yn dangos y gwerthiant a chyflog y staff dros ddau ddiwrnod.

	Gwerthiant	Cyflog y Staff
Dydd Sadwrn	£690.80	£88.00
Dydd Mercher	£480.60	£71.00
Cyfanswm		

Beth ydi'r gwahaniaeth rhwng cyfanswm y gwerthiant a chyfanswm cyflog y staff?

- a £1 330.40
- b £1 122.40
- c £1 028.40
- d £1 012.40

---

20 The shop opens a market stall for two days a week.

The table shows the sales and the staff wages over two days.

	Sales	Staff Wages
Saturday	£690.80	£88.00
Wednesday	£480.60	£71.00
Total		

What is the difference between the total sales and the total staff wages?

- a £1 330.40
- b £1 122.40
- c £1 028.40
- d £1 012.40

## **NAWR EWCH YN ÔL A GWIRIWCH EICH GWAITH**

- **PWYSIG**

A yw'r manylion i frig y ddalen ateb yn gywir?

Ydych chi wedi llenwi eich atebion mewn INC yn y blychau priodol ar y daflen ateb?

---

## **NOW GO BACK AND CHECK YOUR WORK**

- **IMPORTANT**

Are the details at the top of the answer sheet correct?

Have you filled in your answers in INK in the appropriate boxes on the answer sheet?