

Lefel 1 Cymhwyso Sgiliau Rhif Hanfodol Prawf sampl cadarnhau 5

Hyd - ar y mwyaf: 30 munud

Nodyn pwysig

Mae hwn yn brawf sampl cadarnhau, cyhoeddwyd ar y cyd gan y pedwar corff dyfarnu Sgiliau Hanfodol (Agored Cymru, City & Guilds, Pearson a CBAC).

Mae'r prawf sampl yn rhoi arwydd o fformat a strwythur y profion cadarnhaol byw.

Mae dogfen arall sydd yn cynnwys yr allwedd atebion (atebion cywir) a chyfeirnodau'r fanyleb hefyd ar gael.

Mae'r prawf cadarnhau hwn- yn cynnwys 20 o gwestiynau aml-ddewis.

Level 1 Essential Application of Number Skills

Sample confirmatory test 5

Maximum duration: 30 minutes

Important note

This is a sample confirmatory test, developed jointly by the four Essential Skills Wales awarding bodies (Agored Cymru, City & Guilds, Pearson and WJEC).

This sample test provides an indication of the likely format and structure of the live confirmatory tests.

A separate document, containing the answer keys (correct answers) and specification references is also available.

This confirmatory test consists of 20 multiple choice questions.

Mae cwestiynau 1 i 5 yn sôn am arddio.

- 1 Rydych eisiau dewis planhigion sy'n addas ar gyfer eich gardd. Dyma tabl sy'n dangos gwybodaeth am rai o'r planhigion y gallwch eu dewis.

Math o blanhigyn	Uchder (modfeddi)	Amser tyfu (diwrnodau)	Amser blodeuo
Penigan y gerddi	12 i 14	140	Mai i Gorffennaf
Briallen	4 i 12	120	Chwefror i Mai
Blodyn yr haul	36 i 60	90	Mai i Hydref
Fioled	4 i 8	135	Mawrth i Mai
Serenllys	12 i 20	160	Mawrth ac Ebrill

Rydych chi eisiau planhigyn sydd:

- yn blodeuo ym mis Ebrill.
- yn tyfu hyd at tua 12 modfedd o uchder
- ag amser tyfu sy'n llai na 150 diwrnod.

Pa un o'r planhigion yn y tabl a ddylech chi ei ddewis?

- a Penigan y gerddi
- b Briallen
- c Fioled
- d Serenllys

Questions 1 to 5 are about gardening.

- 1 You want to choose suitable plants for your garden. Here is a table of information about some plants to choose from.

Type of plant	Height (inches)	Growing time (days)	Flowering time
Carnation	12 to 14	140	May to July
Primrose	4 to 12	120	Feb to May
Sunflower	36 to 60	90	May to Oct
Violet	4 to 8	135	March to May
Aster	12 to 20	160	March and April

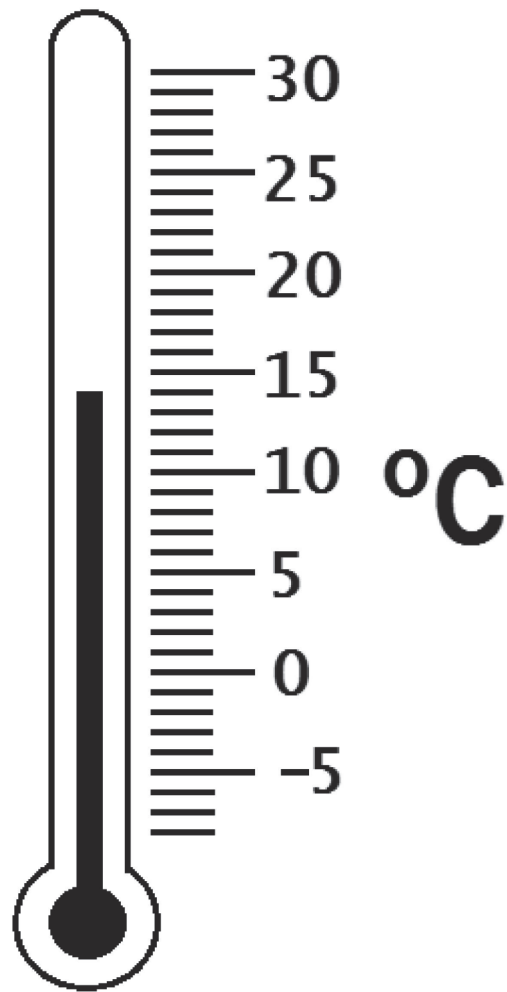
You want a plant that will:

- flower in April.
- grow to about 12 inches high
- have a growing time of less than 150 days.

Which of the plants in the table should you choose?

- a Carnation
- b Primrose
- c Violet
- d Aster

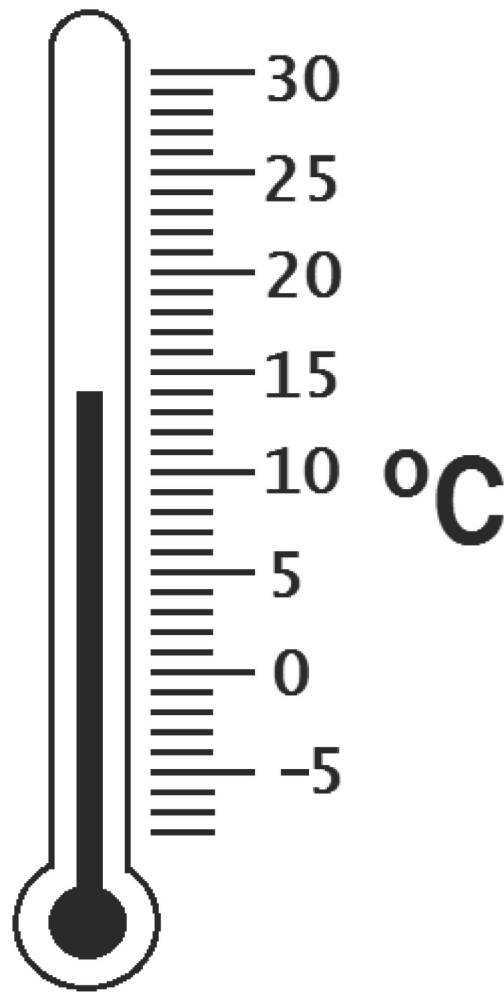
2 Mae gennych chi thermomedr yn eich tŷ gwydr. Mae'n dangos y tymheredd mewn graddau Celsius.



Pa dymheredd mae'r thermomedr yn ei ddangos?

- a 16°C
- b 15°C
- c 14°C
- d 13°C

2 You have a thermometer in your greenhouse. It shows the temperature in degrees Celsius.



What temperature does the thermometer show?

- a 16°C
- b 15°C
- c 14°C
- d 13°C

3 Rydych yn prynu'r offer garddio hyn gyda darn papur £20.

Rhaw	£7.95
Fforch	£6.50
Trywel	£2.75

Faint o newid a ddylech chi ei gael?

- a £2.80
 - b £3.20
 - c £3.80
 - d £4.90
-

3 You buy these garden tools with a £20 note.

Spade	£7.95
Fork	£6.50
Trowel	£2.75

How much change should you receive?

- a £2.80
- b £3.20
- c £3.80
- d £4.90

4 Petryal yw siâp gardd ac mae'n 4 metr o hyd a 3 metr o led.

Beth yw perimedr yr ardd?

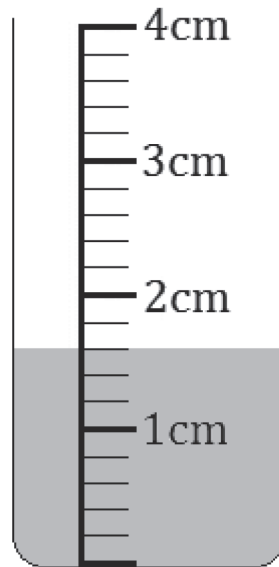
- a 7 m
 - b 11 m
 - c 12 m
 - d 14 m
-

4 A garden is a rectangle that is 4 metres long and 3 metres wide.

What is the perimeter of the garden?

- a 7 m
- b 11 m
- c 12 m
- d 14 m

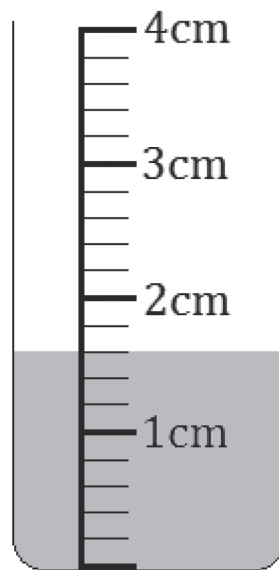
5 Mae'r diagram hwn yn dangos swm y glawiad ar un diwrnod.



Beth yw swm y glawiad ar y diwrnod hwnnw?

- a 1.3 cm
- b 1.6 cm
- c 1.8 cm
- d 2.4 cm

5 This diagram shows the amount of rainfall on one day.



What is the amount of rainfall on that day?

- a 1.3 cm
- b 1.6 cm
- c 1.8 cm
- d 2.4 cm

Mae cwestiynau 6 i 10 yn sôn am daith car.

6 Dyma nifer y milltiroedd mae'r car wedi ei deithio.

1 0 3 0 4 7

Beth yw'r rhif hwn mewn geiriau?

- a Cant a thri mil a phedwar deg saith
 - b Cant a thri mil pedwar cant a saith
 - c Cant a thri deg mil a phedwar deg saith
 - d Can mil tri chant a phedwar deg saith
-

Questions 6 to 10 are about a car journey.

6 This is the number of miles the car has travelled.


1 0 3 0 4 7

What is this number in words?

- a One hundred and three thousand and forty seven
- b One hundred and three thousand four hundred and seven
- c One hundred and thirty thousand and forty seven
- d One hundred thousand three hundred and forty seven

7 Mae'r mesurydd tanwydd hwn yn dangos faint o danwydd sydd yn nhanc y car.

Mae **E** yn golygu gwag ac **F** yn golygu llawn.




Mae'r tanc yn dal 60 litr pan mae'n llawn.

Faint o danwydd sydd yn y tanc?

- a 15 litr
- b 40 litr
- c 45 litr
- d 50 litr

7 This fuel gauge shows how much fuel is in the car's tank.

E means empty and **F** means full.



The tank holds 60 litres when full.

How much fuel is in the tank?

- a 15 litres
- b 40 litres
- c 45 litres
- d 50 litres

- 8 Mae'r car yn teithio 15 cilometr bob 20 munud.
Mae eich taith yn 90 cilometr o hyd.

Faint o amser a ddylai eich taith ei gymryd?

- a 80 munud
 - b 100 munud
 - c 120 munud
 - d 140 munud
-

- 8 The car travels 15 kilometres every 20 minutes.
Your journey is 90 kilometres long.

How long should your journey take?

- a 80 minutes
- b 100 minutes
- c 120 minutes
- d 140 minutes

- 9 Rydych yn prynu 30 litr o danwydd.
Mae'r tanwydd yn costio £1.02 y litr.

Beth yw cyfanswm cost y tanwydd?

- a £30.06
 - b £30.60
 - c £33.60
 - d £36.00
-

- 9 You buy 30 litres of fuel.
The fuel costs £1.02 per litre.

What is the total cost of the fuel?

- a £30.06
- b £30.60
- c £33.60
- d £36.00

10 Rydych yn prynu potel hanner litr o hylif glanhau ffenestr car.

Beth yw hanner litr mewn mililitrau?

- a 5 ml
 - b 50 ml
 - c 500 ml
 - d 5000 ml
-

10 You buy a half litre bottle of windscreen wash.

What is half a litre in millilitres?

- a 5 ml
- b 50 ml
- c 500 ml
- d 5000 ml

Mae cwestiynau 11 i 14 yn sôn am brofion llygaid.

- 11 Mae optegydd yn gwneud profion llygaid.
Dyma nifer y profion llygaid sydd wedi eu harchebu ar gyfer yr wythnos nesaf.

Llun	Maw	Mer	Iau	Gwe
9	6	8	6	6

Beth yw cyfartaledd (cymedr) nifer y profion llygaid bob dydd?

- a 3
- b 6
- c 7
- d 8

Questions 11 to 14 are about eye tests.

- 11 An optician does eye tests.
These are the numbers of eye tests booked for next week.

Mon	Tue	Wed	Thu	Fri
9	6	8	6	6

What is the average (mean) number of eye tests each day?

- a 3
- b 6
- c 7
- d 8

12 Cafodd 40 o bobl brawf llygaid yr wythnos diwethaf.

Roedd angen sbectol newydd ar 10 person.

Pa ganran sydd yr un faint â $\frac{10}{40}$?

- a 50%
 - b 40%
 - c 25%
 - d 10%
-

12 Last week 40 people had eye tests.

There were 10 people who needed new glasses.

What percentage is the same as $\frac{10}{40}$?

- a 50%
- b 40%
- c 25%
- d 10%

13 Mae 80% o'r cwsmeriaid yn archebu eu prawf llygaid ar-lein.

Pa ffraciwn sydd yr un faint ag 80%?

a $\frac{1}{80}$

b $\frac{1}{8}$

c $\frac{5}{8}$

d $\frac{4}{5}$

13 80% of customers book their eye test online.

Which fraction is the same as 80%?

a $\frac{1}{80}$

b $\frac{1}{8}$

c $\frac{5}{8}$

d $\frac{4}{5}$

14 Cafodd yr optegydd gyfanswm o 18 cwsmer ar y dydd Gwener.

Cafodd dau draean o'r cwsmeriaid hyn brawf llygaid am ddim.

Faint o'r cwsmeriaid ar y dydd Gwener a gafodd brawf llygaid am ddim?

- a 6
 - b 8
 - c 9
 - d 12
-

14 The optician had a total of 18 customers on Friday.

Two thirds of these customers had a free eye test.

How many customers on Friday had a free eye test?

- a 6
- b 8
- c 9
- d 12

Mae cwestiynau 15 i 20 yn sôn am seiclo.

15 Mae arnoch angen £175 i brynu beic. Rydych yn penderfynu cynilo £25 o'ch cyflog bob wythnos.

Sawl wythnos bydd yn ei gymryd i gynilo digon o arian i brynu'r beic?

- a 8
 - b 7
 - c 5
 - d 3
-

Questions 15 to 20 are about cycling.

15 You need £175 to buy a bike. You decide to save £25 a week from your wages.

How many weeks will it take to save enough money to buy the bike?

- a 8
- b 7
- c 5
- d 3

16 Rydych yn penderfynu prynu rhai eitemau ar gyfer eich beic.

Cloch	£2.75
Potel ddŵr	£2.40
Golau ôl	£4.26

Rydych yn gweld y fargen hon:

Prynwch dair eitem
ac fe gewch yr un
rhataf am

HANNER PRIS!

Beth yw cyfanswm cost yr eitemau gyda'r fargen hon?

- a £7.28
- b £8.21
- c £9.21
- d £9.41

16 You decide to buy some items for your bike.

Bell	£2.75
Water bottle	£2.40
Rear light	£4.26

You see this offer

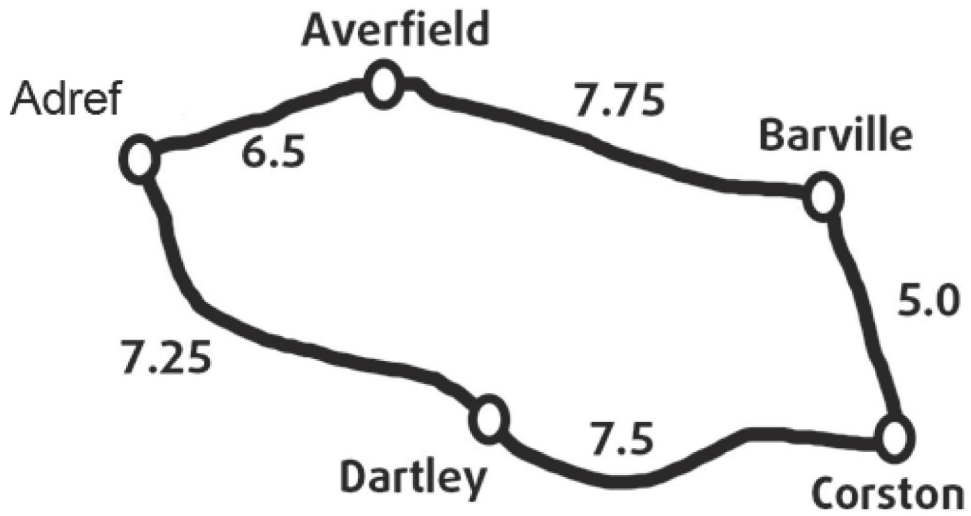
Buy three items and
get the cheapest

HALF PRICE!

What is the total cost of the items with the offer?

- a £7.28
- b £8.21
- c £9.21
- d £9.41

- 17 Ar daith beic, rydych yn teithio trwy bedwar pentref ac yna'n mynd yn ôl adref. Mae'r map yn dangos llwybr eich taith beic.

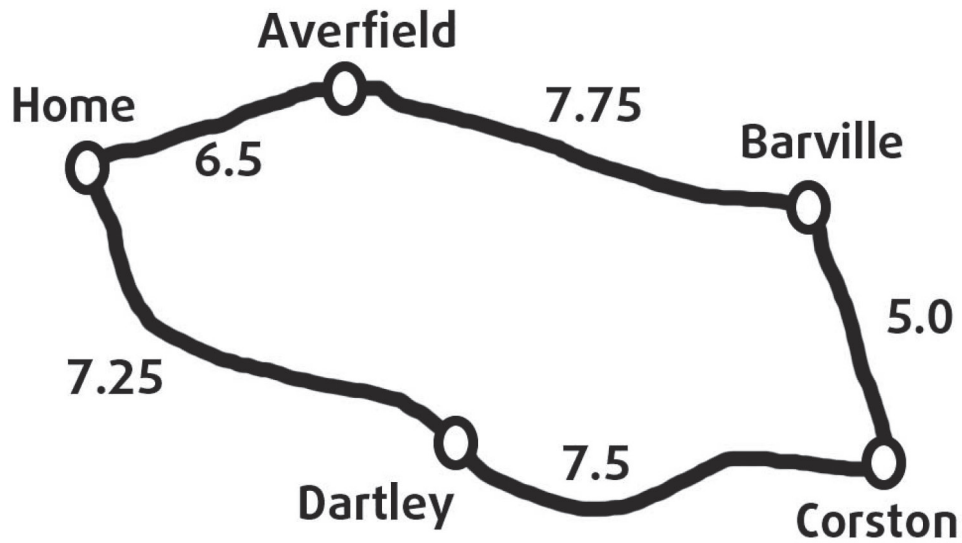


Mae'r pellteroedd wedi eu dangos mewn cilometrau

Beth yw cyfanswm pellter y daith hon?

- a 29 km
- b 32 km
- c 33 km
- d 34 km

- 17 On a bike ride you go through four villages and then go back home. The map shows the route of your bike ride.



**Distances
shown are
in kilometres**

What is the total distance of this ride?

- a 29 km
- b 32 km
- c 33 km
- d 34 km

18 Mae'r diagram hwn yn dangos y pellteroedd mewn cilometrau rhwng rhai pentrefi ar daith wahanol.

	Aberwaun	Blaenmor	Coedpen	Llanfor	Pont
Aberwaun		8	12	4	9
Blaenmor	8		5	10	11
Coedpen	12	5		8	13
Llanfor	4	10	8		15
Pont	9	11	13	15	

Pa mor bell yw hi o Blaenmor i Pont?

- a 9 km
 - b 10 km
 - c 11 km
 - d 13 km
-

18 This diagram shows the distances in kilometres between some villages on a different route.

	Aberwaun	Blaenmor	Coedpen	Llanfor	Pont
Aberwaun		8	12	4	9
Blaenmor	8		5	10	11
Coedpen	12	5		8	13
Llanfor	4	10	8		15
Pont	9	11	13	15	

How far is it from Blaenmor to Pont?

- a 9 km
- b 10 km
- c 11 km
- d 13 km

19 Byddech chi'n hoffi reidio 100 cilometr ar eich beic bob wythnos.

Dyma'r pellteroedd rydych chi wedi eu reidio'n barod yr wythnos hon.

26 km 31 km 24 km

Sawl cilometr arall sydd angen i chi eu reidio'r wythnos hon?

- a 29 km
 - b 24 km
 - c 21 km
 - d 19 km
-

19 You would like to ride 100 kilometres each week on your bike.

Here are the distances you have already ridden this week.

26 km 31 km 24 km

How many more kilometres do you have to ride this week?

- a 29 km
- b 24 km
- c 21 km
- d 19 km

- 20 Rydych yn defnyddio map i gynllunio taith beic arall.
Dyma'r raddfa ar y map.

Graddfa 2 cm : 1 km

Mae'r daith yn 36 cm ar y map.

Pa mor bell yw'r daith beic go iawn?

- a 12 km
 - b 18 km
 - c 34 km
 - d 72 km
-

- 20 You use a map to plan another bike ride.
This is the scale on the map.

Scale 2 cm : 1 km

The ride is 36 cm on the map.

How far is the actual bike ride?

- a 12 km
- b 18 km
- c 34 km
- d 72 km

NAWR EWCH YN ÔL A GWIRIWCH EICH GWAITH

- **PWYSIG -**
A yw'r manylion i frig y ddalen Ateb cywir?
Ydych chi wedi llenwi eich atebion mewn INC yn y blychau priodol ar y daflen ateb?
-

NOW GO BACK AND CHECK YOUR WORK

- **IMPORTANT -**
Are the details at the top of the answer sheet correct?
Have you filled in your answers in INK in the appropriate boxes on the answer sheet?